

Name _____ # _____

Subject Fourth Grade Music Teacher Code _____


20

Due Date: September 25, 2009




Lines of the Treble Staff

This is a **staff**. It has five lines and four spaces. We count the lines and spaces starting from the bottom.

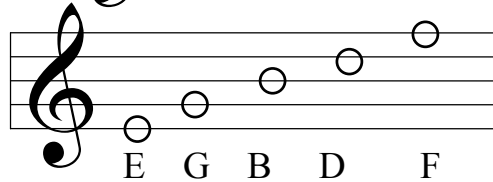


This is a **treble clef**. It is used for **high** notes. Instruments like the flute and violin read music written in the treble clef.



A staff with a treble clef sign is called a **treble staff**.

The notes on the treble staff **lines** are **E G B D F**.



A saying to help you remember the lines of the treble staff is:

Every Good Boy Does Fine

YOUR ASSIGNMENT:

A. Write in the letter names of these notes next to the number. (5pts)

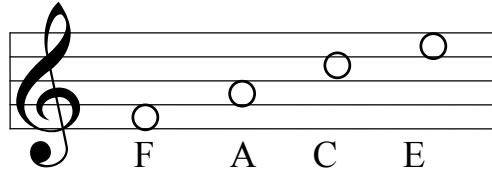
1. 2. 3. 4. 5. 6. 7. 8. 9. 10.

B. Write notes on the lines over each letter name. (5pts)

E G B D F B E F D G

Spaces of the Treble Staff

The notes on the treble staff
spaces are **F A C E**.



To help you remember the spaces of the treble staff, notice they spell FACE. (**Face** also rhymes with **space**... and it is spelled by the notes on the **spaces** of the treble clef ... very clever!)

.....

YOUR ASSIGNMENT:

A. Write in the letter names of these notes next to the number. (5pts)

1. 2. 3. 4. 5. 6. 7. 8. 9. 10.

B. Write whole notes in the **spaces** over each letter name. Your notes should fit neatly **between** the lines. (5pts)

F A C E A F E C E F

