


Name _____ # _____

Subject Fourth Grade Music Teacher Code _____

20

Due Date: October 8, 2009



Recorder Note Challenge!

A. Color in the circles to show how each note is played. (6pts)

T	○	T	○	T	○	T	○	T	○	T	○
○	○	○	○	○	○	○	○	○	○	○	○
	○		○		○		○		○		○
_____		_____		_____		_____		_____		_____	
○		○		○		○		○		○	
○		○		○		○		○		○	
○		○		○		○		○		○	
○		○		○		○		○		○	

G A B G B A

B. When playing the recorder, which hand needs to be on the top? (1pt) _____

C. Name 3 of “Mrs. Hamp’s Important Tips” to remember to get the best sound out of your recorder. You will find them in your recorder book. (3pts)

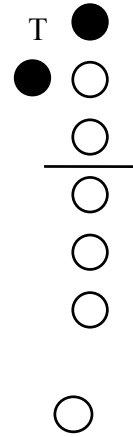
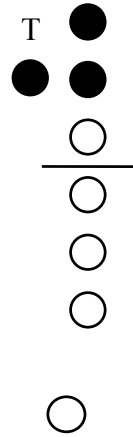
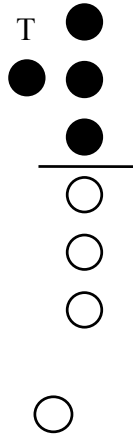
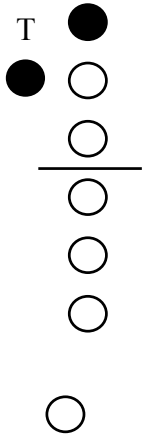
- 1.

- 2.

- 3.

Name That Note!

A. Write the letter names of the notes below the recorder charts. Check your work by looking in your recorder book. (4pts)




1. _____

2. _____


3. _____

4. _____


B. Write the letter names of the notes below. (6pts)




1. _____




2. _____




3. _____



4. _____



5. _____



6. _____

Don't forget to check your work!

