


Name _____ # _____

Subject Fifth Grade Music Teacher Code _____

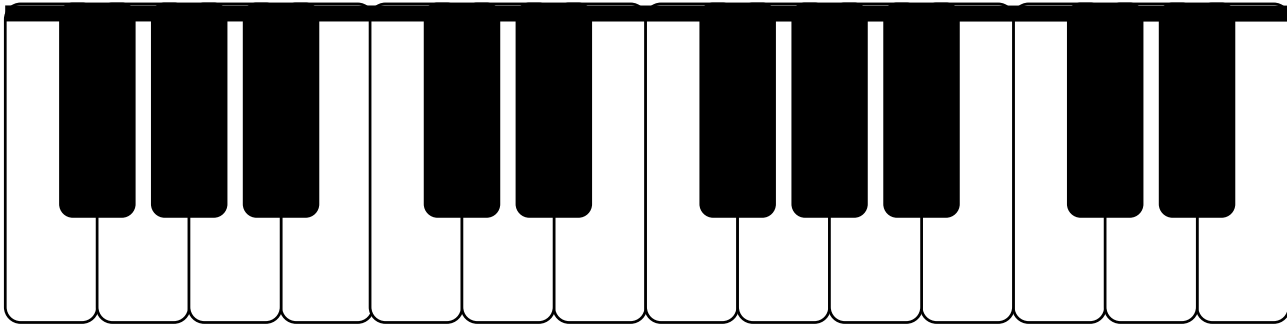
Due Date: October 1, 2009

20



Name That Note!

A. Draw a circle around the groups of two black keys. (1pt)



B. What is the name of the note on the left of the two black keys? (1pt) _____

C. Write C on the two correct piano keys above. Make sure you label both Cs! (2pt)

D. Write the letter names of the notes below. (6pts)

1. _____

2. _____

3. _____

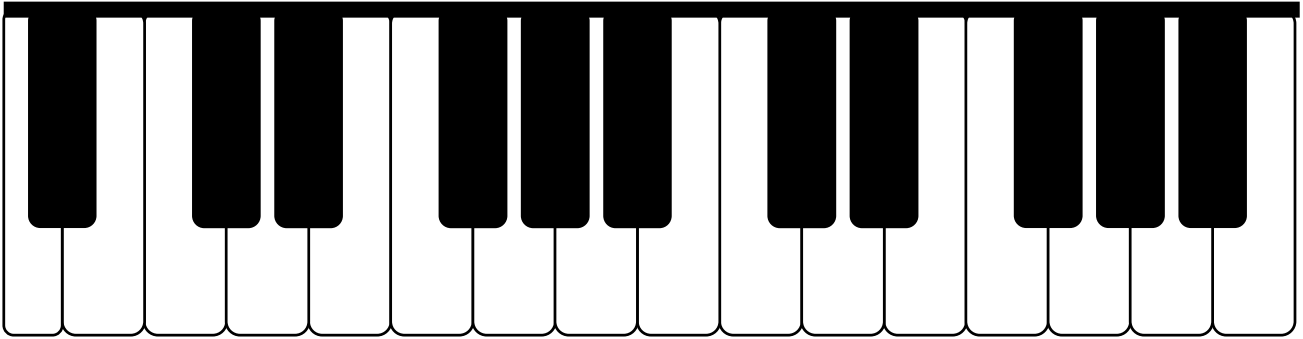
4. _____

5. _____

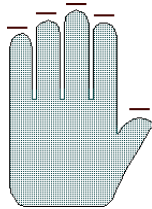
6. _____

Name That Note... again!

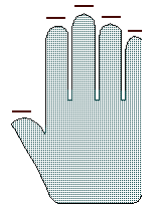
A. Label **all** C, D, E, F and Gs on the correct piano keys above (there are 2 of each). (2pt)



B. Number each of the fingers below. (Each hand has a 1, 2, 3, 4, and 5 finger.) (2pts)

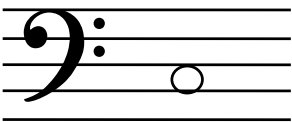


(left hand)

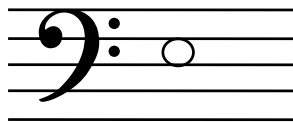


(right hand)

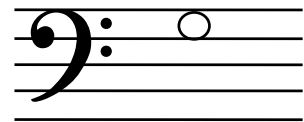
C. Write the letter names of the bass clef notes below. (6pts)



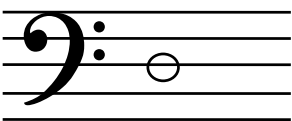
1. _____



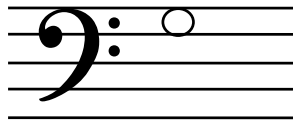
2. _____



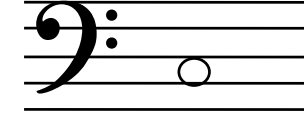
3. _____



4. _____



5. _____



6. _____

