

Name _____ # _____

Subject Fifth Grade Music Teacher Code _____

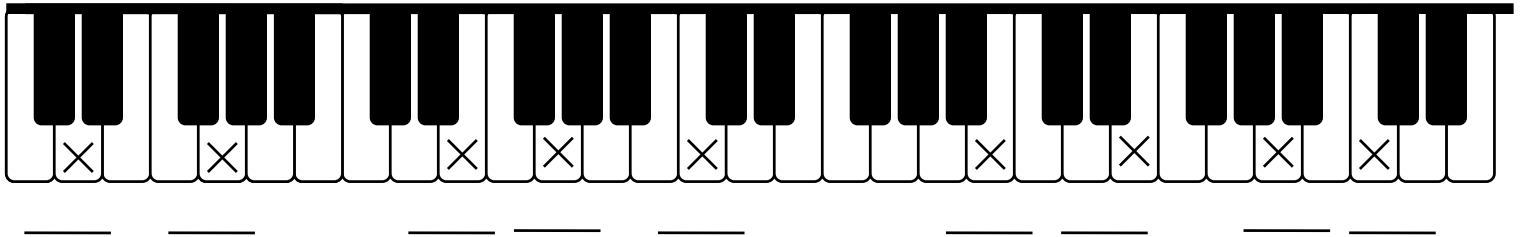
25

Due Date: October 22, 2009

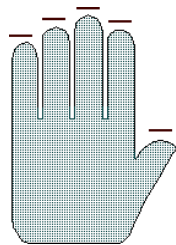


The Piano Keyboard

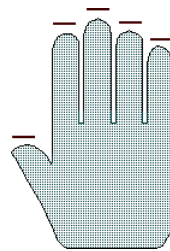
1. How many letters are there in the music alphabet? (1pt) _____
2. Print the letter names of the music alphabet starting on A. (1pt) _____
3. Print the music alphabet backwards, ending on A. (1pt) _____
4. Color in all of the C's on the keyboard below. You should find 5 of them. (1pt)
5. Write the letter name of each key marked with an X on the lines provided. (9pts)



6. If you were to play upwards on the piano, which direction would you go? Draw an arrow pointing "upwards" underneath the keyboard above. (1pt)
7. Below is an outline of a left and right hand. Number the fingers of each hand 1 to 5. (2pts)










Left Hand



Right Hand

8. Color in the correct key on the piano above the notes on the staff. (6pts)



9. A chord is three or more notes played at the same time. Chords are usually played in the left hand to form harmony to accompany melodies played in the right hand. Color in the correct keys on the piano above the chords below. You will color 3 notes for each problem and watch out for the **bass clef**! (3pts)

